

NAME:

CLASS:

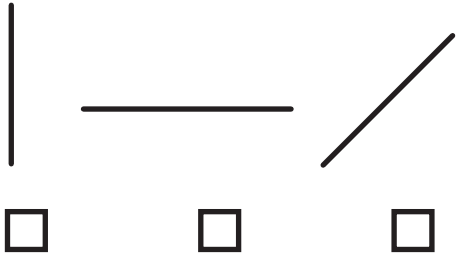
DATE:

SAFE 10

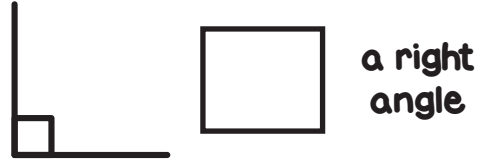
WK: 1

/10

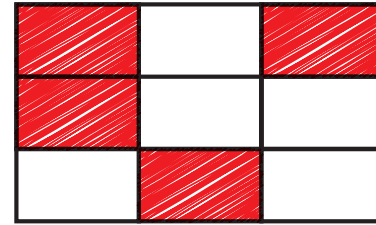
1 Tick the vertical line



4 Write in >, <, or =



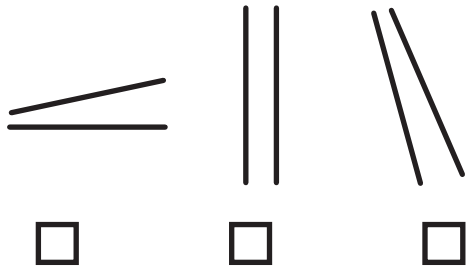
7 Write as a fraction



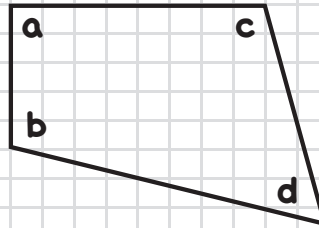
\_\_\_\_\_

\_\_\_\_\_

2 Tick the parallel lines




5



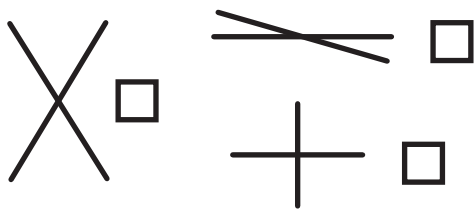
\_\_\_\_\_ is a right angle

8 Write as a mixed number



\_\_\_\_\_

3 Tick the perpendicular lines



6 Tick which is true?

$\frac{3}{4} = 1$       $\frac{5}{4} = 1$

$\frac{4}{4} = 1$

9  $\frac{8}{9} - \frac{3}{9} =$

10  $3 + \frac{2}{5} + 5 =$



MY LAST SCORE?! .....

HAVE I BEAT THAT?! .....

